

Name: _____

Thirty

Special Number

30

Trace and write.

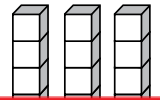
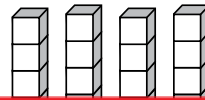
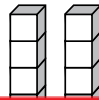
30

thirty

odd

even

Which set of blocks shows 30? (Circle one.)




tens



Preview

Please log in to download the printable version of this worksheet.



Show 30 with tally marks.